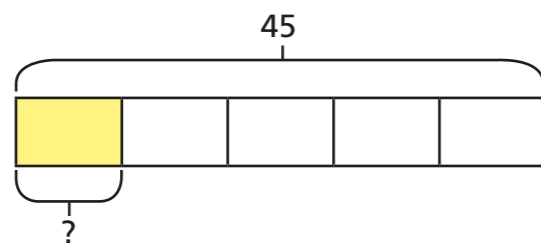


Fractions of an amount

1 Annie and Mo are finding fractions of amounts.

a) Annie is trying to find $\frac{1}{5}$ of 45

She draws this bar model.

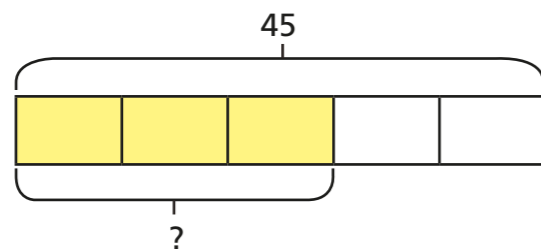


How does the bar model represent the calculation?

What is $\frac{1}{5}$ of 45?



b) Mo is trying to find $\frac{3}{5}$ of 45



How does the bar model represent the calculation?

What is $\frac{3}{5}$ of 45?



c) What is the same and what is different about Mo and Annie's questions?



2 Complete the calculations.

a) $\frac{1}{3}$ of 27 = b) $\frac{1}{3}$ of 72 = c) $\frac{1}{3}$ of 90 =

$\frac{2}{3}$ of 27 = $\frac{1}{6}$ of 72 = $\frac{2}{6}$ of 90 =

$\frac{3}{3}$ of 27 = $\frac{1}{12}$ of 72 = $\frac{3}{9}$ of 90 =

What patterns do you notice?

3 Match the calculations to the correct amounts.

$\frac{5}{8}$ of 48

32

$\frac{2}{3}$ of 48

40

$\frac{5}{6}$ of 48

30

$\frac{3}{4}$ of 48

36

4 Write $<$, $>$ or $=$ to compare the calculations.

- a) $\frac{5}{7}$ of 56 $\frac{5}{8}$ of 56 c) $\frac{2}{3}$ of 63 $\frac{5}{8}$ of 64
- b) $\frac{4}{7}$ of 56 $\frac{5}{8}$ of 56 d) $\frac{7}{10}$ of 350 $\frac{5}{7}$ of 350

5 165 children and adults go on a school trip.
Two thirds of the people are children.

a) How many adults are on the school trip?

b) $\frac{3}{5}$ of the children are boys.

How many boys are on the school trip?

c) $\frac{7}{10}$ of the children have an apple for lunch.





How many children do **not** have an apple for lunch?

6 Tick the odd one out.

$\frac{3}{4}$ of 80	$\frac{3}{8}$ of 160	$\frac{2}{3}$ of 90	$\frac{3}{4}$ of 100
---------------------	----------------------	---------------------	----------------------

Explain your choice.

7 320 people were asked about their favourite flavour of ice cream.
Here is a pictogram showing the results.

vanilla	
strawberry	
chocolate	
mint choc chip	

a) How many people chose mint choc chip?

b) How many more people chose vanilla than chocolate?

